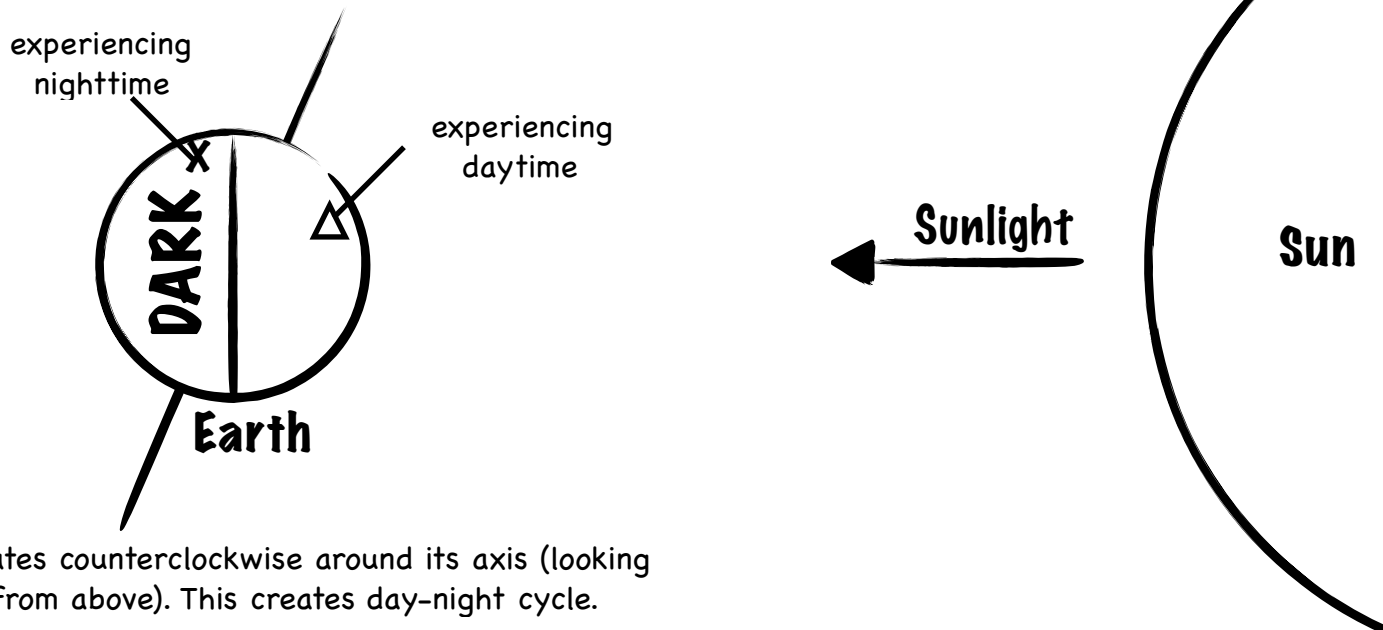


SEASONS

Session 1: Space-Based Perspectives

I. Draw a space-based diagram that shows **why** we experience day and night on Earth.



Earth rotates counterclockwise around its axis (looking down from above). This creates day-night cycle.

Make sure that you:

- Include all objects** that you think are important to show your reasoning.
- Label** the key parts of your diagram.
- Shade** your diagram to show the unlit (nighttime) part.
- Draw a triangle** on a location (a city) that is currently experiencing daytime.
- Draw an X** on a location (a city) that is currently experiencing nighttime.
- Think about how a city like Boston experiences a day-night cycle. **Add arrows** to your diagram to show the movement of the Earth that explains **why** Boston experiences a day-night cycle. Think carefully about *which direction* things should move.

SEASONS

Session 2 - 3: Apparent Path of the Sun in the Sky

A. Make a prediction:

I think the Sun's apparent path in the sky each day is different throughout the year.
< the same / different >

If you think it is the same, explain *why* it is the same.

If you think it is different, describe *how* it is different.

It is different each day because Earth's fixed tilt of Earth changes the

Earth-based orientation with the Sun as Earth moves around the orbital

plane.

(But students won't be expected to know that yet, this is just to collect their

initial ideas.)

B. Collect data for Boston:

Season and date	Marker Color (on SunTracker)	Sun Angle at Midday (in degrees)	Length of Day (in hours)
Winter (December 21)	blue	24°	9 hours
Spring (March 21)	green	48°	12 hours
Summer (June 21)	red	71°	15 hours
Fall (September 21)	black	48°	12 hours

C. Compare and analyze data for Boston:

- Which season has the highest Sun angle at midday? Summer
- Which season has the lowest Sun angle at midday? Winter
- Which season has the longest day length? Summer
- Which season has the shortest day length? Winter
- Which seasons have the same Sun angle at midday / day length? Spring and Fall
- Was the Sun ever directly overhead in Boston? Nope

D. Record your ideas:

How do you think the Sun's height in the sky and the length of day affect temperature on Earth?

- Here are some ways I think the Sun's **height in the sky** affects temperature:

Higher sun angles produce more concentrated light, resulting in more energy and higher temperature. (But students aren't expected to know that yet.)

- Here are some ways I think the **length of day** affects temperature:

More hours of daylight mean light and energy transmit to a location on Earth for a longer time, raising the temperature. (Again, hasn't been explained yet.)

SEASONS

Session 4: Sun Angle and Energy

Activity: Modeling Light from the Sun

In this activity you will use the littleBits light sensors to model sunlight hitting the ground at different angles. You will explore how Sun angle affects the amount of energy we receive from the Sun (and therefore, temperature).

A. Collect data:

Complete this table with your group:

Sun Angle (in degrees)	Intensity of Light (number you see on the littleBits sensor)
90°	different for each group
60°	different for each group
30°	different for each group
10°	different for each group

B. Compare and analyze:

At which Sun angle is the light most intense?

90°

When sunlight is more intense, the temperature will be (warmer / colder).

warmer

At which Sun angle is the light least intense?

10°

When sunlight is less intense, the temperature will be (warmer / colder).

colder

C. Record your ideas:

Based on **what we have learned so far**, explain **why** you think it is warmer in the summer than in the winter.

Try to connect what you have learned about

- (1) how the Sun appears to move in the sky during different seasons;
- (2) how the Earth's axis affects the mid-day Sun angle; and
- (3) how the Sun's angle in the sky affects the intensity of light we receive.

It is warmer in the summer because the hemisphere is tipped towards the

Sun, which results in a higher sun angle. Higher sun angles produce more

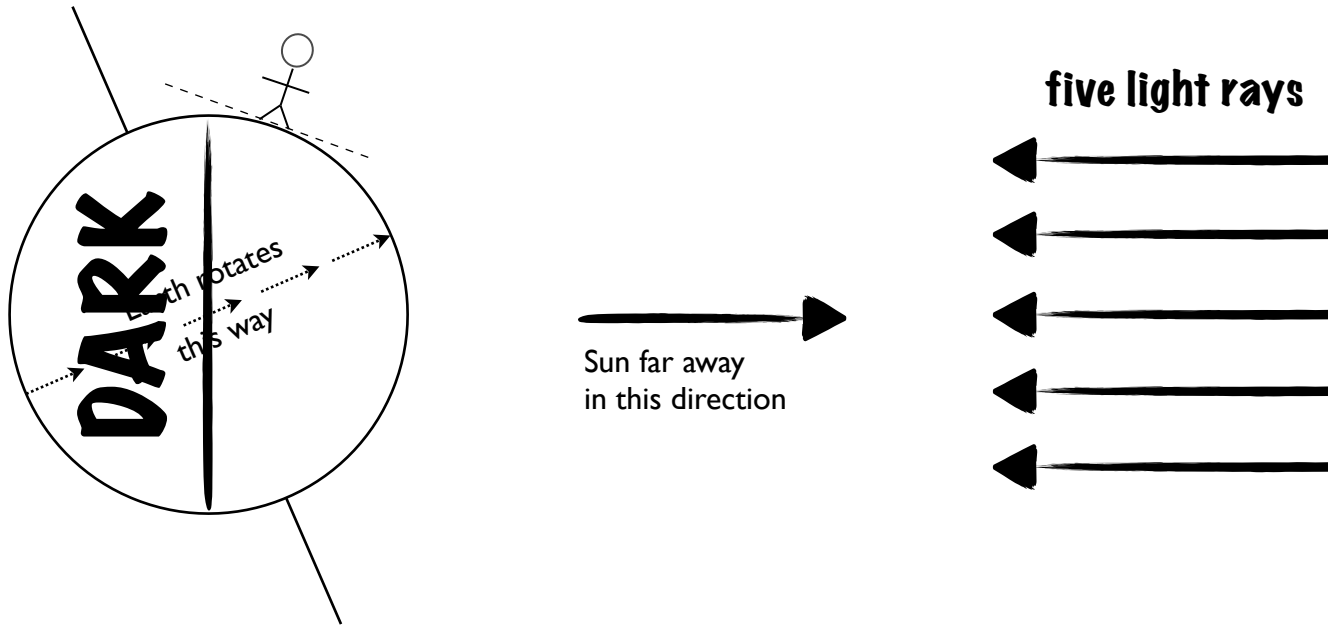
intense sunlight, and therefore more concentrated energy (and warmth).

SEASONS

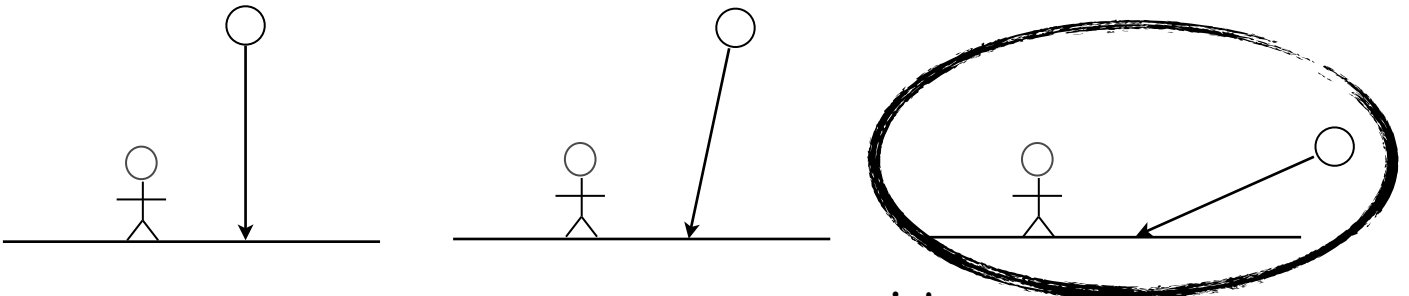
Session 6: Tilted Axis and Sun Angle

A. Interpret This Diagram:

Diagram **NOT** to scale.



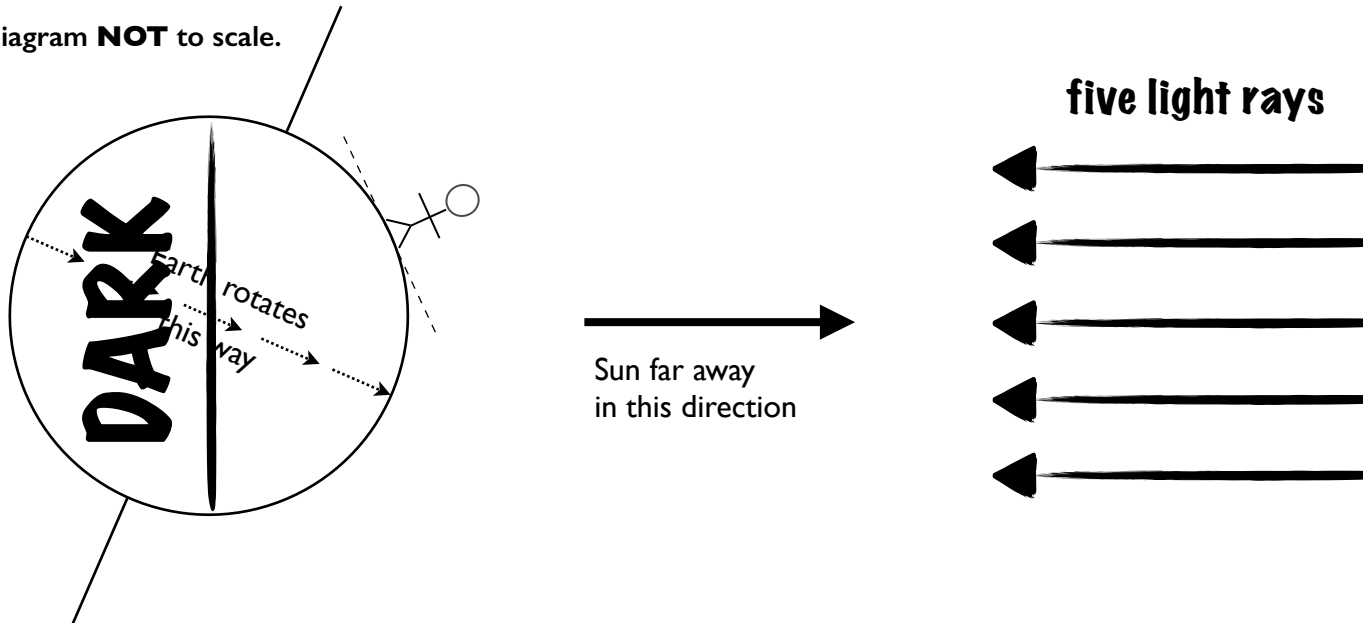
- The Northern Hemisphere is tilted away from the Sun.
< towards / away from >
- Sketch in **five light rays** from the Sun, to show how you think sunlight reaches Earth.
- Shade the diagram to show which part of Earth is **dark**.
- What time of day do you think it is for the stick person above? midday
< sunrise / midday / sunset / midnight >
- Circle which of the three figures below you think best represents the angle of sunlight hitting the person's ground at the moment shown above. The angle of sunlight is the same as the Sun Angle.



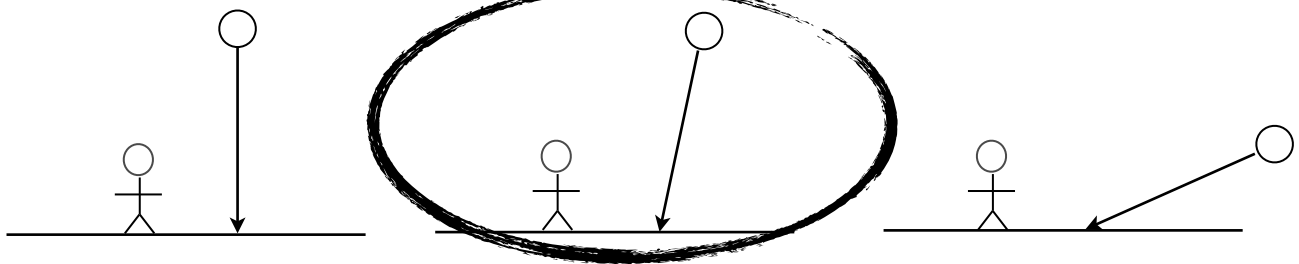
- What season do you think it is for the stick person? winter
< summer / winter >

B. Interpret this diagram:

Diagram **NOT** to scale.



1. The Northern Hemisphere is tilted away from the Sun.
< towards / away from >
2. Sketch in **five light rays** from the Sun, to show how you think sunlight reaches Earth.
3. Shade the diagram to show which part of Earth is **dark**.
4. What time of day do you think it is for the stick person above? midday
< sunrise / midday / sunset / midnight >
5. Circle the figure that you think best represents the angle of sunlight hitting the person's ground (and therefore, the Sun in the person's sky) at the moment shown above.



6. What season do you think it is for the person? winter
< summer / winter >

C. Compare:

When the Northern Hemisphere is tilted **towards** the Sun, the Sun is high in the sky at midday. This is summer.
< summer / winter >

When the Northern Hemisphere is tilted **away from** the Sun, the Sun is low in the sky at midday. This is winter.
< summer / winter >

SEASONS

Session 7: Tilt and Day Length

I. Collect Data: Total hours of daylight around the world

on June 21

- A. The Northern Hemisphere is tilted toward the Sun.
< toward / away from >
- B. A place that spends this entire day in darkness (never sees the Sun) is McMurdo Station.
This place is in the Southern Hemisphere, close to the South Pole.
< Northern / Southern > < North Pole / South Pole / Equator >
- C. A place that spends less time in daylight than darkness is Puerto Montt.
This place is in the Northern Hemisphere, which is tilted away from the Sun.
< Northern / Southern > < toward / away from >

on December 21

- D. The Northern Hemisphere is tilted away from the Sun.
< toward / away from >
- E. A place that spends more time in daylight than darkness is Boston.
This place is in the Northern Hemisphere, which is tilted toward the Sun.
< Northern / Southern > < toward / away from >
- F. A place that spends the same amount of time in daylight as darkness is Quito.
This place is located near the Equator.
< North Pole / South Pole / Equator >
- G. A place that spends the entire day in daylight (never sees the Sun set) is Barrow.

Sept. 21

- H. Barrow, Alaska spends the same amount time in daylight than darkness.
< more / the same amount of / less >
- I. Puerto Montt, Chile spends the same amount time in daylight than darkness.
< more / the same amount of / less >

2. Compare

A. When the Northern Hemisphere is tilted toward the Sun, the Southern Hemisphere is

tilted away from the Sun.
< toward / away from >

B. Cities in the hemisphere tilted toward the Sun have more hours of daylight than darkness.
< more / the same amount of / fewer >

C. Cities in the hemisphere tilted away from the Sun have fewer hours of daylight than darkness.
< more / the same amount of / fewer >

D. Some places on Earth have roughly equal amounts of daylight and darkness every day of the year. These places are close to the Equator.
< Equator / Poles >

E. There are places on Earth where on certain days of the year, the Sun never rises or never sets for an entire day. These places are close to the Poles.
< Equator / Poles >

F. On September 21 and March 21, the total hours of daylight are the same as the total hours of darkness everywhere on Earth.
< more than / the same as / fewer than >

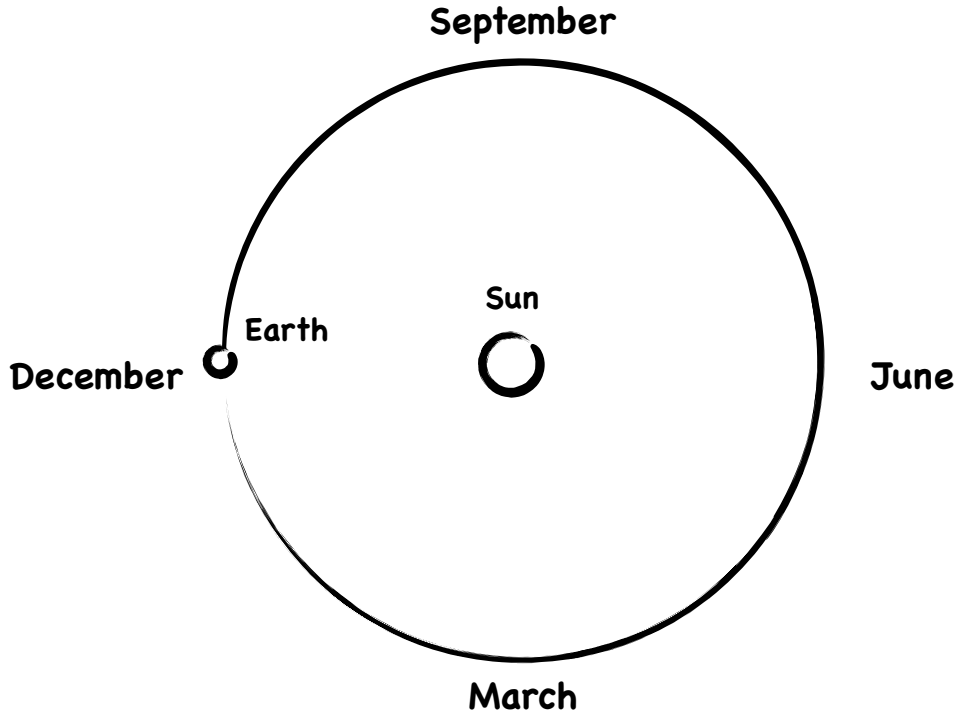
These dates are known as the Equinoxes.

SEASONS

Session 8: Earth's Orbit

I. What shape is Earth's orbit?

- A. Draw a diagram of Earth's orbit around the Sun from an **overhead** perspective.
- B. Label all the key parts of your diagram.
- C. Label where you think Earth is when it's September, December, March, and June.



2. Distance from Earth to the Sun

Predict: In what month (if ever) do you think Earth is closest to the Sun? December

Date (and season in Boston)	Collect Data distance from Earth to the Sun (in kilometers)
December 21 Boston winter	147 million kilometers
March 21 Boston spring	149 million kilometers
June 21 Boston summer	151 million kilometers
September 21 Boston fall	149 million kilometers

3. Compare and analyze

Use the data in your table on the previous page to answer these questions:

Earth is closest to the Sun when it is winter in the Northern Hemisphere.
< fall / winter / spring / summer >

Earth is farthest from the Sun when it is summer in the Northern Hemisphere.
< fall / winter / spring / summer >

4. Reflect

A common belief for why we experience Seasons is that Earth is closer to the Sun in the summer, and farther away in the winter.

Do you agree or disagree with this? disagree
< agree / disagree >

Explain your reasoning. If you disagree, please explain **why** you think we have seasons.

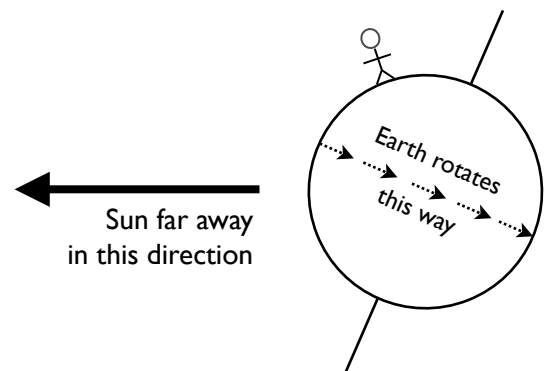
Earth is further away from the Sun when it is summer in the Northern Hemisphere, so this doesn't make sense. We have seasons because the fixed tilt of the Earth results in more intense sunlight and longer days during certain periods of the orbit around the Sun.

5. Recap

i. What season is it for the person in the diagram to the right? summer
< fall / winter / spring / summer >

ii. The person in this diagram will experience (circle one):

- a. A longer day and shorter night
- b. Roughly an equal day and night
- c. A longer night and shorter day



iii. Sketch a side-view of Earth and the Sun when the Southern Hemisphere is experiencing winter.

